





Webseiten-Bericht für mathsgrow.com

Generiert am 04 November 2023 15:21 PM

Der Wert ist 51/100



SEO Inhalte

	Seitentitel	MATHSGROW Länge : 9 Ideal, aber Ihre Seitentitel sollte zwischen 10 und 70 Zeichen (Leerzeichen inbegriffen) enthalten. Benutzen Sie dieses kostenlose Werkzeug um die Länge zu prüfen.								
	Seitenbeschreibung	Welcome to our MATHSGROW.COM site, where numbers come to life. We're here to simplyfy math and make it easy for you. Whether you're a student or professional, we provide clear solve and step-by-step solutions. Let's conquer math together. Länge : 253 Ideal, aber Ihre Seitenbeschreibung sollte zwischen 70 und 160 Zeichen (Leerzeichen incinbegriffen) enthalten. Benutzen Sie dieses kostenlose Werkzeug um die Länge zu prüfen.								
	Suchbegriffe	Nicht so gut. Wir konnten keine META-Suchbegriffe auf Ihrer Webseite finden. Benutzen Sie dieses kostenlose Werkzeug um META-Suchbegriffe zu erzeugen.								
	Og META Eigenschaften	Sehr gut, denn diese Webseite nutzt die Vorteile aus den Og Properties. <table><thead><tr><th>Eigenschaft</th><th>Inhalt</th></tr></thead><tbody><tr><td>locale</td><td>en_US</td></tr><tr><td>type</td><td>website</td></tr><tr><td>title</td><td>MATHSGROW</td></tr></tbody></table>	Eigenschaft	Inhalt	locale	en_US	type	website	title	MATHSGROW
Eigenschaft	Inhalt									
locale	en_US									
type	website									
title	MATHSGROW									

SEO Inhalte





description	Welcome to our MATHSGROW.COM site, where numbers come to life. We're here to simplyfy math and make it easy for you. Whether you're a student or professional, we provide clear solve and step-by-step solutions. Let's conquer math together.
url	https://mathsgrow.com/
site_name	MATHS GROW
updated_time	2023-11-01T22:06:35+05:30
image	https://mathsgrow.com/wp-content/uploads/2023/10/cropped-mathsgrow-favicon.png
image:secure_url	https://mathsgrow.com/wp-content/uploads/2023/10/cropped-mathsgrow-favicon.png
image:width	512
image:height	512
image:alt	mathsgrow
image:type	image/png

Überschriften


H1	H2	H3	H4	H5	H6
0	7	16	0	0	0

- [H2] Our Motto
- [H2] DATA INTERPRETATION
- [H2] ALGEBRA QUESTIONS
- [H2] Maths Questions Solve
- [H2] NEW QUESTIONS
- [H2] Solved Question
- [H2] Percentage
- [H3] [SOLVED] DI Table Chart Questions - 3: The following table shows the percentage (%) distribution of six different types of items A-F produced by a company in the years 2020 and 2021.
- [H3] [SOLVED] DI Table Chart Questions - 2: These are the marks scored by 4 students in 3 different subjects.
- [H3] [SOLVED] DI Pie Chart Questions - 1: What is the percentage of total students enrolled in Medical and Engineering?
- [H3] Using $(x + a)(x + b) = x^2 + (a + b)x + ab$, find (i) 103×104 (ii) 5.1×5.2 (iii) 103×98 (iv) 9.7×9.8
- [H3] Using $a^2 - b^2 = (a + b)(a - b)$, find (i) $512 - 492$ (ii) $(1.02)^2 - (0.98)^2$ (iii) $1532 - 1472$ (iv) $12.12 - 7.92$
- [H3] Using identities, evaluate (i) 71^2 (ii) 99^2 (iii) 1022 (iv) 998^2 (v) 5.2^2 (vi) 297×303 (vii) 78×82 (viii) 8.92 (ix) 10.5×9.5
- [H3] In a medical transaction, 17 times the cost price is equal to 8 times the sum of the cost price and the selling price. What is the gain or loss percentage?




SEO Inhalte

		<ul style="list-style-type: none"> • [H3] P can finish a work in 18 days. When he had worked for 5 days, Q joined him. If both of them together completed the remaining work in $\frac{13}{5}$ days, then in how many days can Q alone finish $66\frac{2}{3}\%$ of the same work? • [H3] A person saves $33\frac{1}{3}\%$ of his income. If the savings increase by 22% and the expenditure increases by 10%, then the percentage increase in his income is: • [H3] If Meena gives an interest of ₹ 45 for one year at 9% rate p.a. What is the sum she has borrowed? • [H3] What rate gives ₹ 280 as interest on a sum of ₹ 56,000 in 2 years? • [H3] Find the amount to be paid at the end of 3 years in each case: (a) Principal = ₹ 1,200 at 12% p.a. (b) Principal = ₹ 7,500 at 5% p.a. • [H3] In a medical transaction, 17 times the cost price is equal to 8 times the sum of the cost price and the selling price. What is the gain or loss percentage? • [H3] The areas of three adjacent faces of a cuboidal solid block of wax are 216 cm², 96 cm² and 144 cm². It is melted and 8 cubes of the same size are formed from it. What is the lateral surface area (in cm²) of 3 such cubes? • [H3] In $\triangle ABC$, $AB = 20$ cm, $BC = 7$ cm and $CA = 15$ cm. Side BC is produced to D such that $\triangle DAB \sim \triangle DCA$. DC is equal to: • [H3] P can finish a work in 18 days. When he had worked for 5 days, Q joined him. If both of them together completed the remaining work in $\frac{13}{5}$ days, then in how many days can Q alone finish $66\frac{2}{3}\%$ of the same work?
	Bilder	<p>Es konnten 33 Bilder auf dieser Webseite gefunden werden.</p> <p>Bei 8 Bilder(n) fehlt ein ALT-Attribut. Fügen Sie ALT-Attribute zu Ihren Bildern, um die Bedeutung der Bilder für Suchmaschinen zugänglich zu machen.</p>
	Text/HTML Verhältnis	<p>Anteil : 7%</p> <p>Das Text zu HTML Code Verhältnis dieser Webseite ist niedriger als 15 Prozent, was bedeutet, dass Sie mehr Inhalte für Ihre Webseite schreiben sollten.</p>
	Flash	Perfekt, denn es wurde kein Flash auf Ihrer Webseite gefunden.
	IFrame	Großartig, denn Sie verwenden keine IFrames auf Ihrer Webseite.

SEO Links

	URL Rewrite	Gut. Ihre Links sind für Suchmaschinen gut lesbar (sprechende Links)!
---	-------------	---

SEO Links

	Underscores in the URLs	Perfekt! Wir haben keine Unterstriche in Ihren Links entdeckt.
	In-page links	We found a total of 34 links including 0 link(s) to files
	Statistics	Externe Links : noFollow 0% Externe Links : natürliche Links 0% Interne Links 100%

In-page links

Anker	Typ	Natürlich
Skip to content	intern	natürliche Links
Home	intern	natürliche Links
Algebra	intern	natürliche Links
Solution	intern	natürliche Links
Data Interpretation	intern	natürliche Links
Contact Us	intern	natürliche Links
Disclaimer	intern	natürliche Links
Terms And Conditions	intern	natürliche Links
About Us	intern	natürliche Links
Using $(x + a)(x + b) = x^2 + (a + b)x + ab$, find (i) 103×104 (ii) 5.1×5.2 (iii) 103×98 (iv) 9.7×9.8	intern	natürliche Links
Using $a^2 - b^2 = (a + b)(a - b)$, find (i) $512 - 492$ (ii) $(1.02)^2 - (0.98)^2$ (iii) $1532 - 1472$ (iv) $12.12 - 7.92$	intern	natürliche Links
Using identities, evaluate (i) 71^2 (ii) 99^2 (iii) 1022 (iv) 998^2 (v) 5.2^2 (vi) 297×303 (vii) 78×82 (viii) 8.92 (ix) 10.5×9.5	intern	natürliche Links
In a medical transaction, 17 times the cost price is equal to 8 times the sum of the cost price and the selling price. What is the gain or loss percentage?	intern	natürliche Links
P can finish a work in 18 days. When he had worked for 5 days, Q joined him. If both of them together completed the remaining work in $\frac{13}{5}$ days, then in how many days can Q alone finish $66\frac{2}{3}\%$ of the same work?	intern	natürliche Links

In-page links

A person saves $\frac{1}{3}$ of his income. If the savings increase by 22% and the expenditure increases by 10%, then the percentage increase in his income is:	intern	natürliche Links
If Meena gives an interest of ₹ 45 for one year at 9% rate p.a. What is the sum she has borrowed?	intern	natürliche Links
What rate gives ₹ 280 as interest on a sum of ₹ 56,000 in 2 years?	intern	natürliche Links
Find the amount to be paid at the end of 3 years in each case: (a) Principal = ₹ 1,200 at 12% p.a. (b) Principal = ₹ 7,500 at 5% p.a.	intern	natürliche Links
The areas of three adjacent faces of a cuboidal solid block of wax are 216 cm², 96 cm² and 144 cm². It is melted and 8 cubes of the same size are formed from it. What is the lateral surface area (in cm²) of 3 such cubes?	intern	natürliche Links
In $\triangle ABC$, $AB = 20$ cm, $BC = 7$ cm and $CA = 15$ cm. Side BC is produced to D such that $\triangle DAB \sim \triangle DCA$. DC is equal to:	intern	natürliche Links
Vidya and Pratap went for a picnic. Their mother gave them a water bottle that contained 5 litres of water. Vidya consumed $\frac{2}{5}$ of the water. Pratap consumed the remaining water.	intern	natürliche Links
Question 6 Multiply and express as a mixed fraction.	intern	natürliche Links
Shade: (i) $\frac{1}{2}$ of the circles in box (a) (ii) $\frac{2}{3}$ of the circles in box (b) (iii) $\frac{3}{5}$ of the circles in box (c)	intern	natürliche Links
Multiply and reduce to lowest form and convert into a mixed fraction: (i) $7 \times \frac{3}{5}$ (ii) $4 \times \frac{1}{3}$ (iii) $2 \times \frac{6}{7}$ (iv) $5 \times \frac{2}{9}$ (v) $\frac{2}{3} \times 4$ (vi) $\frac{5}{2} \times 6$	intern	natürliche Links
Some pictures (a) to (c) are given below. Tell which of them show: (i) $3 \times \frac{1}{5} = \frac{3}{5}$ (ii) $2 \times \frac{1}{3} = \frac{2}{3}$ (iii) $3 \times \frac{3}{4} = 2 \frac{1}{4}$	intern	natürliche Links
Amina buys a book for ₹ 275 and sells it at a loss of 15%. How much does she sell it for?	intern	natürliche Links
Question 7. (i) Chalk contains calcium, carbon, and oxygen in the ratio of 10 : 3 : 12. Find the percentage of carbon in chalk. (ii) If in a stick of chalk, carbon is 3 g, what is the weight of the chalk stick?	intern	natürliche Links
Juki sells a washing machine for ₹ 13,500. She loses 20% in the bargain. What was the price at which she brought it?	intern	natürliche Links
I buy a T.V. for ₹ 10,000 and sell it at a profit of 20%. How much money do I get for it?	intern	natürliche Links
Privacy Policy	intern	natürliche Links

In-page links

Fractions and Decimals	intern	natürliche Links
Mensuration	intern	natürliche Links
Percentage	intern	natürliche Links
Triangle	intern	natürliche Links

SEO Suchbegriffe





 Suchbegriffswolke

days november algebra times
 percentage questions sum work cost
 price


Keywords Consistency

Suchbegriff	Inhalt	Seitentite l	Suchbegri ffe	Seitenbes chreibung	Überschri ften
percentage	20	✘	✘	✘	✓
days	16	✘	✘	✘	✓
price	13	✘	✘	✘	✓
work	12	✘	✘	✘	✓
times	8	✘	✘	✘	✓












Benutzerfreundlichkeit

	URL	Domain : mathsgrow.com Länge : 13
	Favoriten Icon	Gut. Die Webseite hat ein Favicon.
	Druckeigenschaften	Es konnten keine druckfreundlichen CSS-Angaben gefunden werden.
	Sprache	Gut, denn Sie haben in den META-Elementen eine Sprache deklariert: en.





Benutzerfreundlichkeit

	Dublin Core	Diese Webseite nutzt nicht die Vorteile der Dublin Core Elemente.
---	-------------	---




Dokument

	Doctype	HTML 5
	Verschlüsselung	Perfekt, denn Ihre Webseite deklariert einen Zeichensatz: UTF-8.
	W3C Validität	Fehler : 80 Warnungen : 8
	E-Mail Datenschutz	Sehr gut, denn es wurde keine E-Mail Adresse im Klartext auf Ihrer Webseite gefunden.
	Veraltetes HTML	Sehr gut! Sie verwenden aktuelle HTML Tags in Ihrem Webseitenquelltext.
	Tipps zur Webseitengeschwindigkeit	<ul style="list-style-type: none"> Sehr gut, denn Ihre Webseite benutzt keine verschachtelten Tabellen. Schlecht, denn es wurden CSS-Angaben in HTML-Elementen entdeckt. Diese Angaben sollten in ein entsprechendes CSS-Stylesheet verlagert werden. Nicht so gut, denn Ihre Webseite enthält sehr viele CSS-Dateien (mehr als 4). Nicht so gut, denn Ihre Webseite enthält viele Javascript-Dateien (mehr als 6). Gut! Sie nutzen die Vorteile von gzip.

Mobile

	Mobile Optimierung	<ul style="list-style-type: none"> Apple Icon META Viewport Tag Flash Inhalt
---	--------------------	---

Optimierung

	XML-Sitemap	Perfekt! Ihre Seite hat eine XML-Sitemap. https://mathsgrow.com/sitemap_index.xml
	Robots.txt	http://mathsgrow.com/robots.txt Sehr gut! Ihre Webseite enthält eine robots.txt-Datei.
	Analytics	Fehlt Wir haben nicht ein Analyse-Tool auf dieser Website installiert zu erkennen. Webanalyse erlaubt die Quantifizierung der Besucherinteraktionen mit Ihrer Seite. Insofern sollte zumindest ein Analysetool installiert werden. Um die Befunde abzusichern, empfiehlt sich das parallele Verwenden eines zweiten Tools.