





Website beoordeling mathsgrow.com

Gegeneerd op November 04 2023 15:21 PM

De score is 51/100



SEO Content

|  | Title | MATHSGROW Lengte : 9 Let op, uw title tag zou tussen de 10 en 70 karakters (spaties inbegrepen) moeten bevatten. Gebruik deze gratis tool om tekst lengte te berekenen. | | | | | | | | | | |
|--|--|--|----------|---------|--------|-------|------|---------|-------|-----------|-------------|--|
|  | Description | Welcome to our MATHSGROW.COM site, where numbers come to life. We're here to simplyfy math and make it easy for you. Whether you're a student or professional, we provide clear solve and step-by-step solutions. Let's conquer math together. Lengte : 253 Let op, uw meta description zou tussen de 70 en 160 karakters (spaces included) moeten bevatten. | | | | | | | | | | |
|  | Keywords | Erg slecht. We hebben geen meta keywords gevonden in uw website. Gebruik deze gratis online meta tags generator om keywords te genereren. | | | | | | | | | | |
|  | Og Meta Properties | Goed, uw page maakt gebruik van Og Properties. <table><thead><tr><th>Property</th><th>Content</th></tr></thead><tbody><tr><td>locale</td><td>en_US</td></tr><tr><td>type</td><td>website</td></tr><tr><td>title</td><td>MATHSGROW</td></tr><tr><td>description</td><td>Welcome to our MATHSGROW.COM site, where numbers come to life. We're here to simplyfy math and make it easy for you. Whether you're a student or professional, we provide clear solve and step-by-step solutions. Let's conquer math together.</td></tr></tbody></table> | Property | Content | locale | en_US | type | website | title | MATHSGROW | description | Welcome to our MATHSGROW.COM site, where numbers come to life. We're here to simplyfy math and make it easy for you. Whether you're a student or professional, we provide clear solve and step-by-step solutions. Let's conquer math together. |
| Property | Content | | | | | | | | | | | |
| locale | en_US | | | | | | | | | | | |
| type | website | | | | | | | | | | | |
| title | MATHSGROW | | | | | | | | | | | |
| description | Welcome to our MATHSGROW.COM site, where numbers come to life. We're here to simplyfy math and make it easy for you. Whether you're a student or professional, we provide clear solve and step-by-step solutions. Let's conquer math together. | | | | | | | | | | | |

SEO Content





| | |
|------------------|--|
| url | https://mathsgrow.com/ |
| site_name | MATHS GROW |
| updated_time | 2023-11-01T22:06:35+05:30 |
| image | https://mathsgrow.com/wp-content/uploads/2023/10/cropped-mathsgrow-favicon.png |
| image:secure_url | https://mathsgrow.com/wp-content/uploads/2023/10/cropped-mathsgrow-favicon.png |
| image:width | 512 |
| image:height | 512 |
| image:alt | mathsgrow |
| image:type | image/png |

Headings




| H1 | H2 | H3 | H4 | H5 | H6 |
|----|----|----|----|----|----|
| 0 | 7 | 16 | 0 | 0 | 0 |

- [H2] Our Motto
- [H2] DATA INTERPRETATION
- [H2] ALGEBRA QUESTIONS
- [H2] Maths Questions Solve
- [H2] NEW QUESTIONS
- [H2] Solved Question
- [H2] Percentage
- [H3] [SOLVED] DI Table Chart Questions - 3: The following table shows the percentage (%) distribution of six different types of items A-F produced by a company in the years 2020 and 2021.
- [H3] [SOLVED] DI Table Chart Questions - 2: These are the marks scored by 4 students in 3 different subjects.
- [H3] [SOLVED] DI Pie Chart Questions - 1: What is the percentage of total students enrolled in Medical and Engineering?
- [H3] Using $(x + a)(x + b) = x^2 + (a + b)x + ab$, find (i) 103×104 (ii) 5.1×5.2 (iii) 103×98 (iv) 9.7×9.8
- [H3] Using $a^2 - b^2 = (a + b)(a - b)$, find (i) $512 - 492$ (ii) $(1.02)^2 - (0.98)^2$ (iii) $1532 - 1472$ (iv) $12.12 - 7.92$
- [H3] Using identities, evaluate (i) 71^2 (ii) 99^2 (iii) 1022 (iv) 998^2 (v) 5.2^2 (vi) 297×303 (vii) 78×82 (viii) 8.92 (ix) 10.5×9.5
- [H3] In a medical transaction, 17 times the cost price is equal to 8 times the sum of the cost price and the selling price. What is the gain or loss percentage?
- [H3] P can finish a work in 18 days. When he had worked for 5 days, Q joined him. If both of them together completed the remaining work in $\frac{13}{5}$ days, then in how many days can Q alone finish $\frac{2}{3}$ of the same work?
- [H3] A person saves $\frac{1}{3}$ of his income. If the savings increase by 22% and the expenditure increases by 10%, then the percentage increase in his income is:
- [H3] If Meena gives an interest of ₹ 45 for one year at 9% rate

SEO Content

| | | |
|---|-----------------|---|
| | | <p>p.a. What is the sum she has borrowed?</p> <ul style="list-style-type: none"> [H3] What rate gives ₹ 280 as interest on a sum of ₹ 56,000 in 2 years? [H3] Find the amount to be paid at the end of 3 years in each case: (a) Principal = ₹ 1,200 at 12% p.a. (b) Principal = ₹ 7,500 at 5% p.a. [H3] In a medical transaction, 17 times the cost price is equal to 8 times the sum of the cost price and the selling price. What is the gain or loss percentage? [H3] The areas of three adjacent faces of a cuboidal solid block of wax are 216 cm², 96 cm² and 144 cm². It is melted and 8 cubes of the same size are formed from it. What is the lateral surface area (in cm²) of 3 such cubes? [H3] In $\triangle ABC$, $AB = 20$ cm, $BC = 7$ cm and $CA = 15$ cm. Side BC is produced to D such that $\triangle DAB \sim \triangle DCA$. DC is equal to: [H3] P can finish a work in 18 days. When he had worked for 5 days, Q joined him. If both of them together completed the remaining work in $\frac{13}{5}$ days, then in how many days can Q alone finish $66\frac{2}{3}\%$ of the same work? |
|  | Afbeeldingen | <p>We vonden 33 afbeeldingen in de pagina.</p> <p>8 alt attributen ontbreken. Voeg alternatieve text toe zodat zoekmachines beter kunnen beoordelen wat het onderwerp van de afbeeldingen is.</p> |
|  | Text/HTML Ratio | <p>Ratio : 7%</p> <p>De ratio van text tot HTML code is below 15 procent, dit betekent dat uw pagina waarschijnlijk meer tekst nodig heeft.</p> |
|  | Flash | Perfect, geen Flash content gevonden in uw website. |
|  | Iframe | Perfect, er zijn geen Iframes in uw website aangetroffen. |

SEO Links

| | | |
|---|------------------------|---|
|  | Herschreven URL | Perfect. Uw links zien er vriendelijk uit! |
|  | Underscores in de URLs | Perfect! Geen underscores gevonden in uw URLs. |
|  | In-page links | We vonden een totaal van 34 links inclusie 0 link(s) naar bestanden |
| | Statistics | Externe Links : noFollow 0% |

SEO Links



Externe Links : doFollow 0%

Interne Links 100%

In-page links

| Ankertekst | Type | samenstelling |
|--|--------|---------------|
| Skip to content | Intern | doFollow |
| Home | Intern | doFollow |
| Algebra | Intern | doFollow |
| Solution | Intern | doFollow |
| Data Interpretation | Intern | doFollow |
| Contact Us | Intern | doFollow |
| Disclaimer | Intern | doFollow |
| Terms And Conditions | Intern | doFollow |
| About Us | Intern | doFollow |
| Using $(x + a)(x + b) = x^2 + (a + b)x + ab$, find (i) 103×104 (ii) 5.1×5.2 (iii) 103×98 (iv) 9.7×9.8 | Intern | doFollow |
| Using $a^2 - b^2 = (a + b)(a - b)$, find (i) $512 - 492$ (ii) $(1.02)^2 - (0.98)^2$ (iii) $1532 - 1472$ (iv) $12.12 - 7.92$ | Intern | doFollow |
| Using identities, evaluate (i) 71^2 (ii) 99^2 (iii) 1022 (iv) 998^2 (v) 5.2^2 (vi) 297×303 (vii) 78×82 (viii) 8.92 (ix) 10.5×9.5 | Intern | doFollow |
| In a medical transaction, 17 times the cost price is equal to 8 times the sum of the cost price and the selling price. What is the gain or loss percentage? | Intern | doFollow |
| P can finish a work in 18 days. When he had worked for 5 days, O joined him. If both of them together completed the remaining work in $\frac{13}{5}$ days, then in how many days can O alone finish $66\frac{2}{3}\%$ of the same work? | Intern | doFollow |
| A person saves $33\frac{1}{3}\%$ of his income. If the savings increase by 22% and the expenditure increases by 10%, then the percentage increase in his income is: | Intern | doFollow |
| If Meena gives an interest of ₹ 45 for one year at 9% rate p.a. What is the sum she has borrowed? | Intern | doFollow |

In-page links

| | | |
|--|--------|----------|
| What rate gives ₹ 280 as interest on a sum of ₹ 56,000 in 2 years? | Intern | doFollow |
| Find the amount to be paid at the end of 3 years in each case: (a) Principal = ₹ 1,200 at 12% p.a. (b) Principal = ₹ 7,500 at 5% p.a. | Intern | doFollow |
| The areas of three adjacent faces of a cuboidal solid block of wax are 216 cm², 96 cm² and 144 cm². It is melted and 8 cubes of the same size are formed from it. What is the lateral surface area (in cm²) of 3 such cubes? | Intern | doFollow |
| In $\triangle ABC$, $AB = 20$ cm, $BC = 7$ cm and $CA = 15$ cm. Side BC is produced to D such that $\triangle DAB \sim \triangle DCA$. DC is equal to: | Intern | doFollow |
| Vidya and Pratap went for a picnic. Their mother gave them a water bottle that contained 5 litres of water. Vidya consumed 25 of the water. Pratap consumed the remaining water. | Intern | doFollow |
| Question 6 Multiply and express as a mixed fraction. | Intern | doFollow |
| Shade: (i) $\frac{1}{2}$ of the circles in box (a) (ii) $\frac{2}{3}$ of the circles in box (b) (iii) $\frac{3}{5}$ of the circles in box (c) | Intern | doFollow |
| Multiply and reduce to lowest form and convert into a mixed fraction: (i) $7 \times \frac{3}{5}$ (ii) $4 \times \frac{1}{3}$ (iii) $2 \times \frac{6}{7}$ (iv) $5 \times \frac{2}{9}$ (v) $\frac{2}{3} \times 4$ (vi) $\frac{5}{2} \times 6$ | Intern | doFollow |
| Some pictures (a) to (c) are given below. Tell which of them show: (i) $3 \times \frac{1}{5} = \frac{3}{5}$ (ii) $2 \times \frac{1}{3} = \frac{2}{3}$ (iii) $3 \times \frac{3}{4} = 2 \frac{1}{4}$ | Intern | doFollow |
| Amina buys a book for ₹ 275 and sells it at a loss of 15%. How much does she sell it for? | Intern | doFollow |
| Question 7. (i) Chalk contains calcium, carbon, and oxygen in the ratio of 10 : 3 : 12. Find the percentage of carbon in chalk. (ii) If in a stick of chalk, carbon is 3 g, what is the weight of the chalk stick? | Intern | doFollow |
| Juki sells a washing machine for ₹ 13,500. She loses 20% in the bargain. What was the price at which she brought it? | Intern | doFollow |
| I buy a T.V. for ₹ 10,000 and sell it at a profit of 20%. How much money do I get for it? | Intern | doFollow |
| Privacy Policy | Intern | doFollow |
| Fractions and Decimals | Intern | doFollow |
| Mensuration | Intern | doFollow |
| Percentage | Intern | doFollow |
| Triangle | Intern | doFollow |

SEO Keywords



Keywords Cloud

questions **days percentage** sum
algebra **price** cost **work** november times

Keywords Consistentie

| Keyword | Content | Title | Keywords | Description | Headings |
|------------|---------|-------|----------|-------------|----------|
| percentage | 20 | ✘ | ✘ | ✘ | ✔ |
| days | 16 | ✘ | ✘ | ✘ | ✔ |
| price | 13 | ✘ | ✘ | ✘ | ✔ |
| work | 12 | ✘ | ✘ | ✘ | ✔ |
| times | 8 | ✘ | ✘ | ✘ | ✔ |

Bruikbaarheid

| | | |
|--|---------------|---|
| | Url | Domein : mathsgrow.com Lengte : 13 |
| | Favicon | Goed, uw website heeft een favicon. |
| | Printbaarheid | Jammer. We vonden geen Print-Vriendelijke CSS. |
| | Taal | Goed. Uw ingestelde taal is en. |
| | Dublin Core | Deze pagina maakt geen gebruik van Dublin Core. |





Document

| | | |
|--|---------|--------|
| | Doctype | HTML 5 |
|--|---------|--------|

Document

| | | |
|--|------------------------|--|
|  | Encoding | Perfect. Uw ingestelde Charset is UTF-8. |
|  | W3C Validiteit | Fouten : 80 Waarschuwingen : 8 |
|  | E-mail Privacy | Geweldig er is geen e-mail adres gevonden als platte tekst! |
|  | Niet ondersteunde HTML | Geweldig! We hebben geen niet meer ondersteunde HTML tags gevonden in uw HTML. |
|  | Speed Tips | <ul style="list-style-type: none"> Geweldig, uw website heeft geen tabellen in een tabel. Jammer, uw website maakt gebruik van inline styles. Jammer, uw website heeft teveel CSS bestanden (meer dan 4). Jammer, uw website heeft teveel JS bestanden (meer dan 6). Perfect, uw website haalt voordeel uit gzip. |

Mobile

| | | |
|--|---------------------|--|
|  | Mobile Optimization | <ul style="list-style-type: none"> Apple Icon Meta Viewport Tag Flash content |
|--|---------------------|--|

Optimalisatie

| | | |
|--|-------------|--|
|  | XML Sitemap | Geweldig, uw website heeft een XML sitemap. https://mathsgrow.com/sitemap_index.xml |
|  | Robots.txt | http://mathsgrow.com/robots.txt Geweldig uw website heeft een robots.txt bestand. |
|  | Analytics | Ontbrekend We hadden niet op te sporen van een analytics tool op deze website geplaatst. |

Optimalisatie

Web Analytics laat u toe de bezoekersactiviteit op uw website te meten. U zou minstens 1 Analytics tool geïnstalleerd moeten hebben en een extra tool voor de bevestiging van de resultaten.